

# PUBLIC SERVICE AND LEGAL Police-Communications-Technician

## New York City Police Communications Technician Certification Exam

For More Information – Visit link below:

<https://www.examsempire.com/>

**Product Version**

1. Up to Date products, reliable and verified.
2. Questions and Answers in PDF Format.



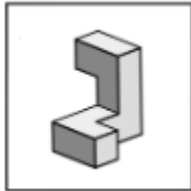
<https://examsempire.com/>

Visit us at: <https://www.examsempire.com/police-communications-technician>

# Latest Version: 6.0

## Question: 1

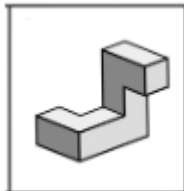
In the pictures below, which of the answer choices shows the same block as the original?



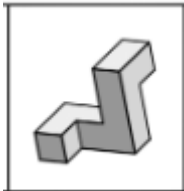
A.



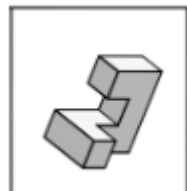
B.



C.



D.



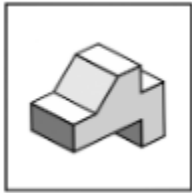
E.



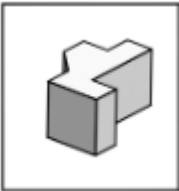
**Answer: C**

## Question: 2

In the pictures below, which of the answer choices shows the same block as the original?



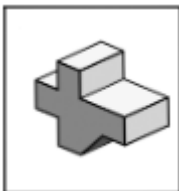
A.



B.



C.



D.



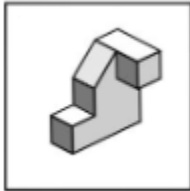
E.



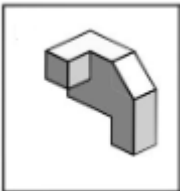
**Answer: E**

### Question: 3

In the pictures below, which of the answer choices shows the same block as the original?



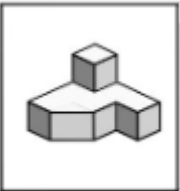
A.



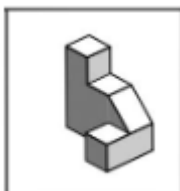
B.



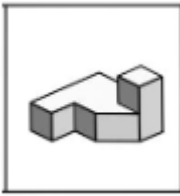
C.



D.



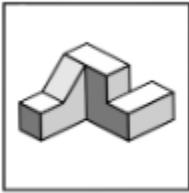
E.



**Answer: D**

### Question: 4

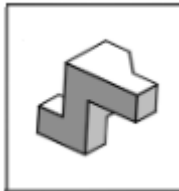
In the pictures below, which of the answer choices shows the same block as the original?



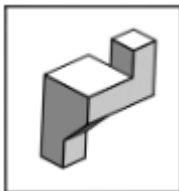
A.



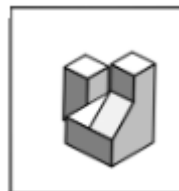
B.



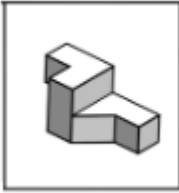
C.



D.



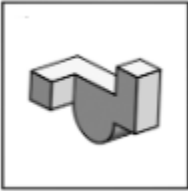
E.



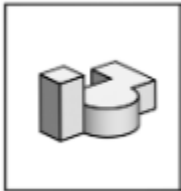
**Answer: B**

### Question: 5

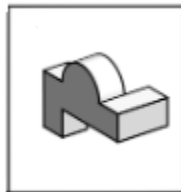
In the pictures below, which of the answer choices shows the same block as the original?



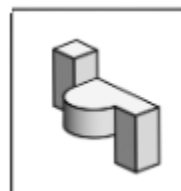
A.



B.



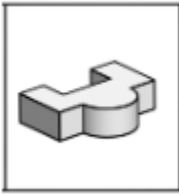
C.



D.



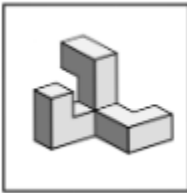
E.



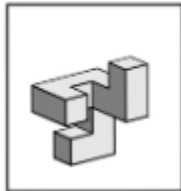
**Answer: A**

### Question: 6

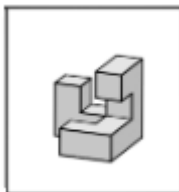
In the pictures below, which of the answer choices shows the same block as the original?



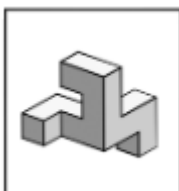
A.



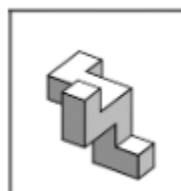
B.



C.



D.



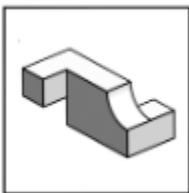
E.



**Answer: C**

### Question: 7

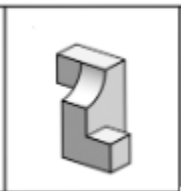
In the pictures below, which of the answer choices shows the same block as the original?



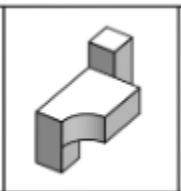
A.



B.

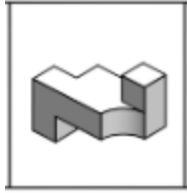


C.

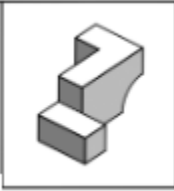


D.





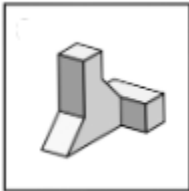
E.



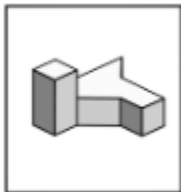
**Answer: D**

### Question: 8

In the pictures below, which of the answer choices shows the same block as the original?



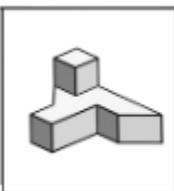
A.



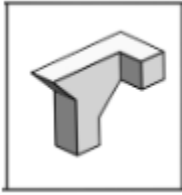
B.



C.



D.



E.




**Answer: A**

### Question: 9


A flat square of paper is folded one or more times. The broken lines indicate the original position of the paper. The solid lines indicate the position of the folded paper. The paper is never turned or twisted. The folded paper always remains within the edges of the original square. There are multiple folds in each item. After the last fold, a hole is punched in the paper. Your task is to mentally unfold the paper and determine the position of the holes on the original square. Choose the pattern of black circles that indicates the position of the holes on the original square. There is only one correct pattern for each item.




A.




B.



C.



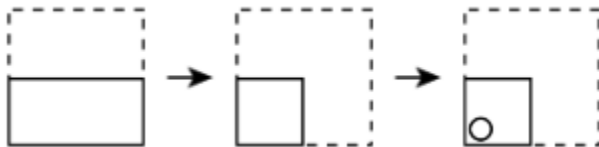
D.




**Answer: A**

### Question: 10


A flat square of paper is folded one or more times. The broken lines indicate the original position of the paper. The solid lines indicate the position of the folded paper. The paper is never turned or twisted. The folded paper always remains within the edges of the original square. There are multiple folds in each item. After the last fold, a hole is punched in the paper. Your task is to mentally unfold the paper and determine the position of the holes on the original square. Choose the pattern of black circles that indicates the position of the holes on the original square. There is only one correct pattern for each item.




A.




B.



C.



D.



**Answer: D**

**Thank You for Trying Our Product**

**Special 16 USD Discount Coupon: NSZUBG3X**

**Email:** [support@examsempire.com](mailto:support@examsempire.com)

**Check our Customer Testimonials and ratings  
available on every product page.**

**Visit our website.**

**<https://examsempire.com/>**